


2D Shapes

Color each shapes and Trace number words.


Write the correct number of side and corners of each shapes.




Side _____



Corners _____



Circle



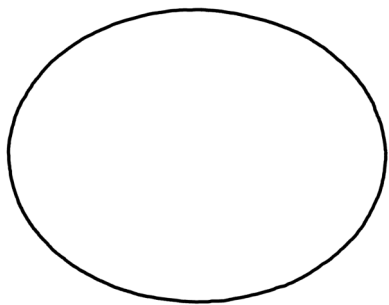
Side _____



Corners _____




Square



Side _____ 4

Corners _____ 0


Oval



Side _____ 4

Corners _____ 4

Rectangle



Side _____ 4

Corners _____ 4

Diamond